

2015 AP<sup>®</sup> BIOLOGY FREE-RESPONSE QUESTIONS

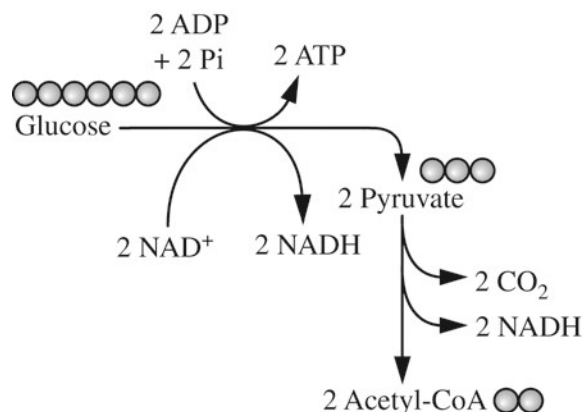


Figure 1. Glycolysis and pyruvate oxidation

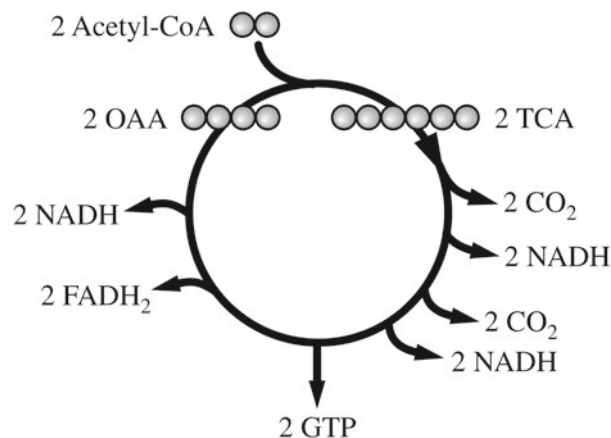


Figure 2. Krebs cycle

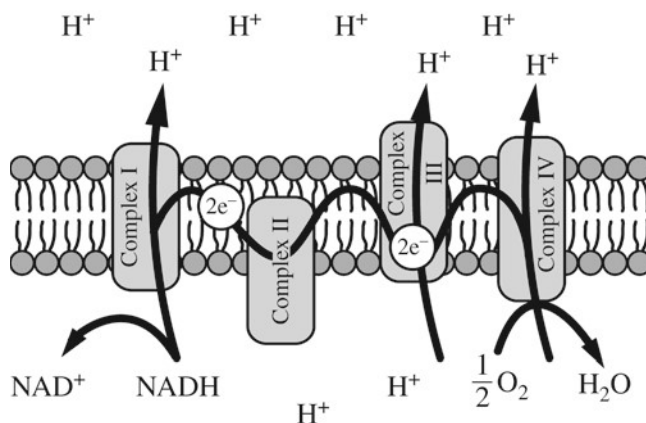


Figure 3. Electron transport chain

2. Cellular respiration includes the metabolic pathways of glycolysis, the Krebs cycle, and the electron transport chain, as represented in the figures. In cellular respiration, carbohydrates and other metabolites are oxidized, and the resulting energy-transfer reactions support the synthesis of ATP.

(a) Using the information above, **describe** ONE contribution of each of the following in ATP synthesis.

- Catabolism of glucose in glycolysis and pyruvate oxidation
- Oxidation of intermediates in the Krebs cycle
- Formation of a proton gradient by the electron transport chain

(b) Use each of the following observations to **justify** the claim that glycolysis first occurred in a common ancestor of all living organisms.

- Nearly all existing organisms perform glycolysis.
- Glycolysis occurs under anaerobic conditions.
- Glycolysis occurs only in the cytosol.

## 2015 AP<sup>®</sup> BIOLOGY FREE-RESPONSE QUESTIONS

- (c) A researcher estimates that, in a certain organism, the complete metabolism of glucose produces 30 molecules of ATP for each molecule of glucose. The energy released from the total oxidation of glucose under standard conditions is 686 kcal/mol. The energy released from the hydrolysis of ATP to ADP and inorganic phosphate under standard conditions is 7.3 kcal/mol. **Calculate** the amount of energy available from the hydrolysis of 30 moles of ATP. **Calculate** the efficiency of total ATP production from 1 mole of glucose in the organism. **Describe** what happens to the excess energy that is released from the metabolism of glucose.
- (d) The enzymes of the Krebs cycle function in the cytosol of bacteria, but among eukaryotes the enzymes function mostly in the mitochondria. **Pose** a scientific question that connects the subcellular location of the enzymes in the Krebs cycle to the evolution of eukaryotes.